

KENDRIYA VIDYALAYA SANGATHAN BHOPAL  
CBT ONLINE EXAM DECEMBER-2023 CLASS 12TH-GEOGRAPHY

CLASS-12<sup>th</sup>

SUBJECT-GEOGRAPHY

1. Which one is not the objective of NAMAMI GANGE PROGRAMME?
- a. Monitoring of industrial effluents.
  - b. Creating Job Opportunity
  - c. Development of Riverfront
  - d. Development of "Ganga Gram" in Uttarakand, UP, Bihar, Jharkhand and West Bengal

**Answer- b. Creating job opportunity**

Creating job opportunity is not the objective of NAMAMI GANGE PROGRAMME.

2. As per WHO \_\_\_\_\_ is the biggest killer in southeast Asia?

- a. Air Pollution
- b. Water Pollution
- c. Soil Pollution
- d. Malaria

**Answer- a. Air Pollution**

According to WHO, Air pollution is the biggest killer in South East Asia.

3. By 2050 \_\_\_\_\_ of the world's population will live in the urban area?

- a. 1/3
- b. 2/3
- c. 1/4
- d. 2/4

**Answer- b. 2/3**

By 2050 an estimated 2/3 of the world's total population will live in urban area.

4. Read the statements below and choose wrong statement/s.

I- Dharavi is the largest slum of asia.

II- The condition of people who are living in Dharavi is enough satisfactory

III- Dharavi is situated in Mumbai

IV- Dharavi is famous for its exquisite embroidery and Zari work.

- a. Statement -II
- b. Statement- IV
- c. Statement- II & IV
- d. None of these

**Answer- a. Statement -II**

The condition of the people, who are living in DHARAVI is very pathetic.(Source- seabrook, 1996).

5. Assertion(A): Jhabua is, in one of the 5 most backward district of India.  
Reason(R): Tribal population is highly concentrated in Jhabua.

- a. Both A & R are true R is the correct explanation of A
- b. Both A & R are true but R is not the correct explanation of A
- c. A is true but R is false
- d. A is false but R is true

**Answer- b. Both A & R are true but R is not the correct explanation of A**

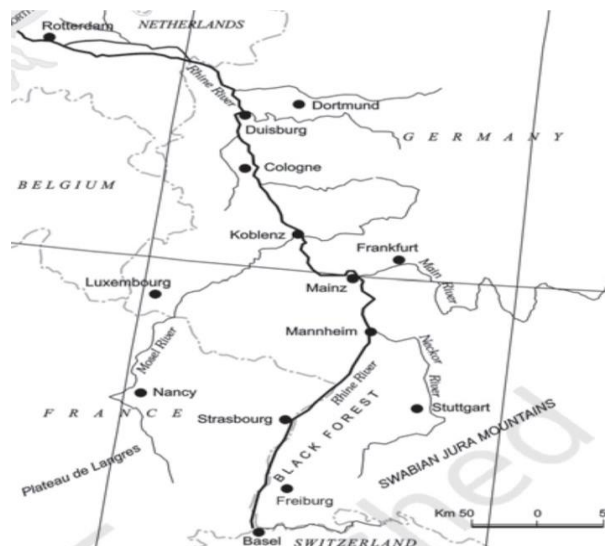
Jhabua is a backward district because it has faced the challenge of resource degradation, both land & forest.

6. Identify the in-land waterways shown in the map?

- a. Onega waterway
- b. Rhine waterway
- c. Volga waterway
- d. Elbe waterway

**Answer-b Rhine waterway**

Correct answer is (b) Rhine waterways  
(Refer atlas and NCERT 12<sup>th</sup> Class book.)



7. Identify the place/port marked by (A)

- a. Gatum
- b. Colon
- c. Panama
- d. Suez

**Answer-b Colon**

Correct answer is (b) Colon (Refer atlas and NCERT 12<sup>th</sup> Class book.)

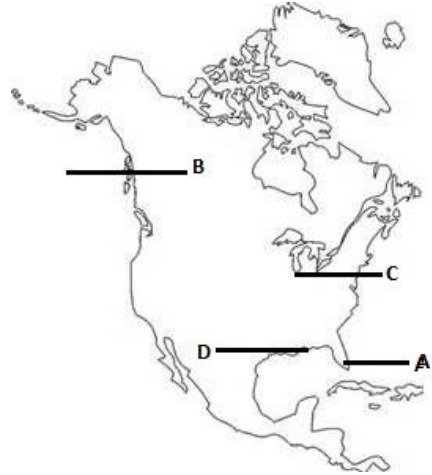


8. Four places are marked by A, B, C and D. Identify the VALPARASIO

- a. A
- b. B
- c. C
- d. D

**Answer- C**

Correct answer is (C) (Refer atlas and NCERT 12<sup>th</sup> Class book.)

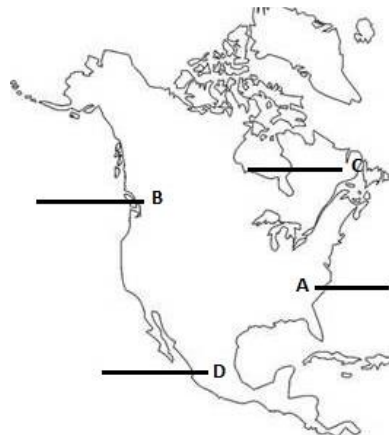


9. Four places are marked by A, B, C and D. Identify the Vancouver

- a. A
- b. B
- c. C
- d. D

**Answer-b**

Correct answer is (b) (Refer atlas and NCERT 12<sup>th</sup> Class book.)



10. Four places are marked by A, B, C and D. Identify the NAIROBI Airport.

- a. A
- b. B
- c. C
- d. D

**Answer-a**

Correct answer is (a) (Refer atlas and NCERT 12<sup>th</sup> Class book.)

